

# Add and subtract 2-digit and 3-digit numbers – not crossing 10 or 100



1 Work out the additions.

a)

Hundreds	Tens	Ones

	H	T	O
	2	5	1
+		3	2
<hr/>			

b)

H	T	O

	H	T	O
	3	0	7
+		4	2
<hr/>			

c)

	H	T	O
	2	3	7
+		5	1
<hr/>			

d)

	H	T	O
	7	5	2
+		3	7
<hr/>			

2 Work out these subtractions.

a)

H	T	O

	H	T	O
	4	2	7
-		1	5
<hr/>			

b)

H	T	O

	H	T	O
	5	3	6
-		3	5
<hr/>			

c)

	H	T	O
	7	8	5
-		5	2
<hr/>			

d)

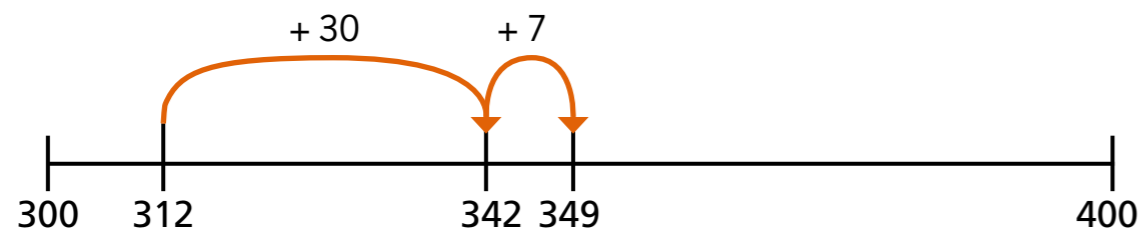
	H	T	O
	9	8	5
-		7	2
<hr/>			

3 Complete the additions.

a) £69 + £220 = £


b) 314 + 42 + 23 =

- 4 a) Eva uses a number line to work out  $312 + 37$




What has Eva done? Talk to a partner.

- b) Use the number line to work out  $425 + 63$



- c) Use the number line to work out  $774 - 62$



- 5 Esther has a piece of wood 255 cm long.

She cuts it into 2 pieces.



One piece is 34 cm long.

How long is the other piece?

- 6 Filip wants to buy these two items.



He has £200

Does he have enough money? \_\_\_\_\_

How do you know? Talk to a partner.

- 7 Use the digit cards to make each calculation correct.



		H	T	O
	+			
		9	9	8

		H	T	O
	+			
		9	8	9

		H	T	O
	-			
		1	6	1

		H	T	O
	-			
		6	2	2