
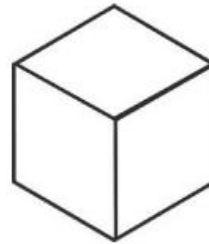
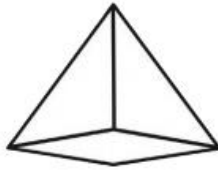
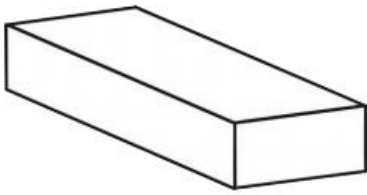
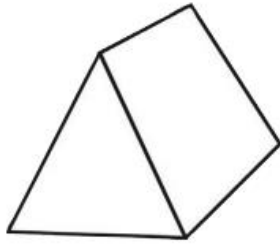
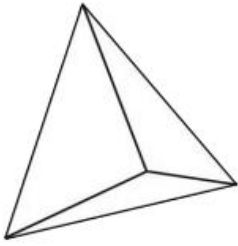


## Maths activity 4

Write the name of the 3D shape beneath each picture.



### **Amazing Fact**

The shape with the largest number of sides is called the rhombicosidodecahedron. Try saying that 3 times, fast!

As an extra challenge, you could find out:

- How many faces the rhombicosidodecahedron has.
- Which 2D shapes its faces are made of.