








## Year 2 Multiplication and Division Word Problems x2, x5, x10

<p>1. How many wheels would 11 motorbikes have?</p>  <div data-bbox="395 779 598 840" style="border: 1px solid black; height: 27px; width: 127px; margin-top: 10px;"></div>	<p>2. If 7 taxis arrive at the party at the same time, each carrying 5 passengers, how many guests arrive at once?</p>  <div data-bbox="758 779 960 840" style="border: 1px solid black; height: 27px; width: 127px; margin-top: 10px;"></div>	<p>3. While playing a dice game, Robert managed to throw nine 5s in a row. How many did he score altogether?</p> <div data-bbox="1117 779 1319 840" style="border: 1px solid black; height: 27px; width: 127px; margin-top: 10px;"></div>
<p>4. All four judges gave the dancer a score of 10. How many did she score altogether?</p>  <div data-bbox="395 1238 598 1299" style="border: 1px solid black; height: 27px; width: 127px; margin-top: 10px;"></div>	<p>5. 12 people came to the show and they each paid £5. How much were the ticket sales altogether?</p> <div data-bbox="758 1238 960 1299" style="border: 1px solid black; height: 27px; width: 127px; margin-top: 10px;"></div>	<p>6. On a wet day, the teacher finds 32 wellies. How many children will be able to wear one on each foot?</p>  <div data-bbox="1117 1238 1319 1299" style="border: 1px solid black; height: 27px; width: 127px; margin-top: 10px;"></div>
<p>7. Sam is sharing biscuits between himself and his four brothers. If there are 25 in the pack how many will they each get?</p>  <div data-bbox="395 1697 598 1758" style="border: 1px solid black; height: 27px; width: 127px; margin-top: 10px;"></div>	<p>8. A machine making sweets puts 10 in each packet. If the machine has produced 70 sweets, how many packets can it fill?</p>  <div data-bbox="758 1697 960 1758" style="border: 1px solid black; height: 27px; width: 127px; margin-top: 10px;"></div>	<p>9. Carol gives half of her owl collection to her sister. She has 35 owls remaining. How many did she have to start with?</p>  <div data-bbox="1117 1697 1319 1758" style="border: 1px solid black; height: 27px; width: 127px; margin-top: 10px;"></div>